





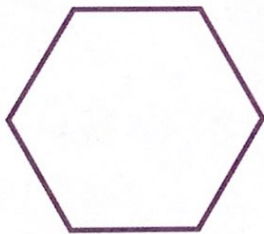
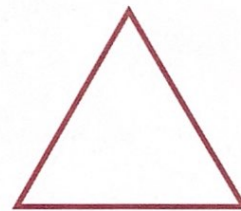

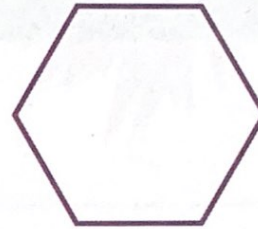

NAME _____

DATE _____

What's the Same?

Color the shapes that have 6 sides **red**.

Color the shapes that have 4 sides **blue**.



How many shapes have 6 sides? _____

How many shapes have 4 sides? _____

NOTE

Students practice identifying and sorting shapes based on the number of sides.

MWI Attributes of 2-D Shapes